


M-PL 5 de 13.5.

○	+	·	○	+	·														
/	\	·	/	\	·														
\	○	\	○																
/	·	×	/	·	×														
×	-	·	○	×	-	·	○												
○	/	/	○	/	/														
+	+	·	\	+	+	·	\												
·		·																	
-	-	-	/																

○	\	·	○	\	·														
	×	×		×	×														
·	·	·	+	·	·	·	+												
-	/	/		-	/	/													
	-		-																
×		○	×		○														
·	○	+																	
\	\	·	-	\	\	·	-												
+	/	○	○	+	/	○	○												

M - PL 6 do 13.5.

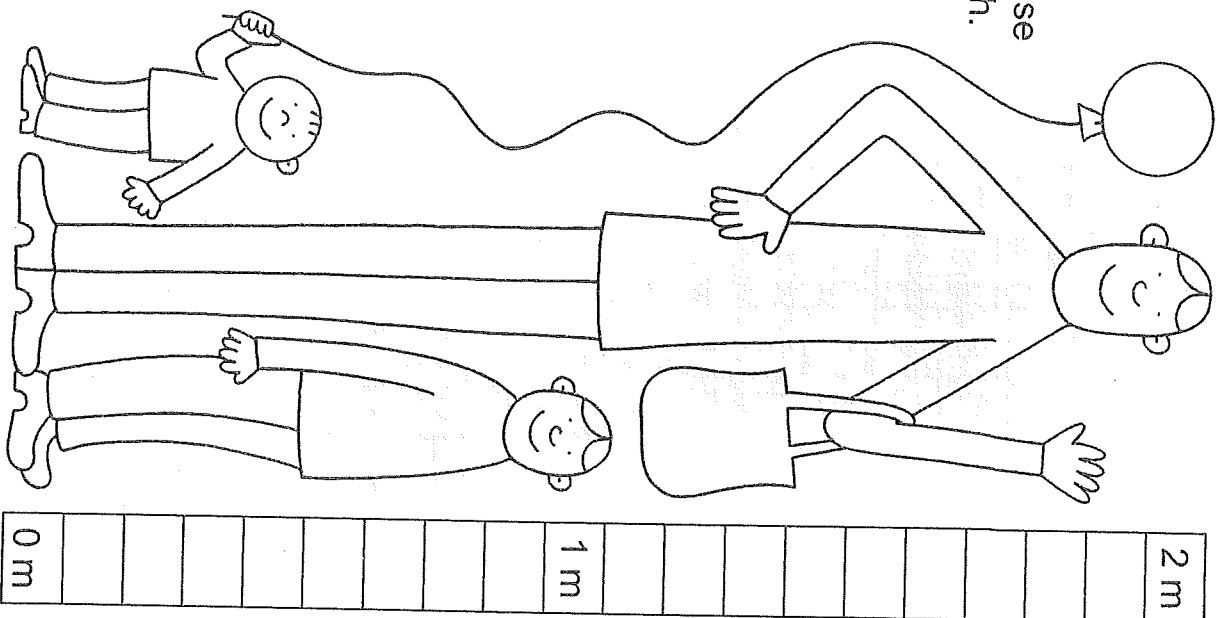
3 + 2 =									+ 4 = 8								
				+						+							
				1						5							
				=						=							
3					+				=								
+							+				6						
2									+								
=							=			=	2						
		+				=	7				+						
				+					=			+					
				6		+					=	9		+			
				=									4				
				=									=				
4 +					=	8					+		3 =				
			+									+					
			2									5					
			=									=					
		+				=											



M-PL7 dr 13.5.

1. Co měříme na metry? Vybarvi písmena jen za tím, co se měří v metrech.

látka	D
mouka	P
koberec	V
drát	A
jablka	Ú
stužka	M
limonáda	L
uhlí	J
šňůra	E
benzín	D
provaz	T
řeпа	N
prkna	R
lino	Y




2. Vybarvená písmena tvoří tajenku.
3. Poznáš Erika? Vybarvi ho.

1. Napiš číslo, které chybí v řadě čísel od deseti do dvaceti nebo od dvaceti do deseti.
2. Do barevných políček dopiš čísla podle tabulky.

Lukáš našel...

10, 11, 12, 13, 14, 15, 16, 17, 18, 20	19	Č
20, 19, 18, 17, 16, 15, 14, 13, 12, 10		
10, 11, 12, 14, 15, 16, 17, 18, 19, 20		
20, 19, 18, 17, 16, 14, 13, 12, 11, 10		
10, 11, 12, 13, 14, 15, 17, 18, 19, 20		
20, 19, 18, 17, 16, 15, 14, 13, 11, 10		
10, 11, 12, 13, 14, 16, 17, 18, 19, 20		
20, 19, 18, 16, 15, 14, 13, 12, 11, 10		
10, 11, 12, 13, 15, 16, 17, 18, 19, 20		
20, 19, 17, 16, 15, 14, 13, 12, 11, 10		
10, 11, 12, 13, 14, 15, 16, 17, 18, 19		

3. Dokresli tajenku.



10	11	12	13	14	15	16	17	18	19	20
A	T	H	Y	B	Ř	I	I	K	Č	Y

M-PL 8 do 13.5.

$$\begin{array}{r} 14 \\ + 5 \\ \hline \end{array}$$

$$\begin{array}{r} 17 \\ + 2 \\ \hline \end{array}$$

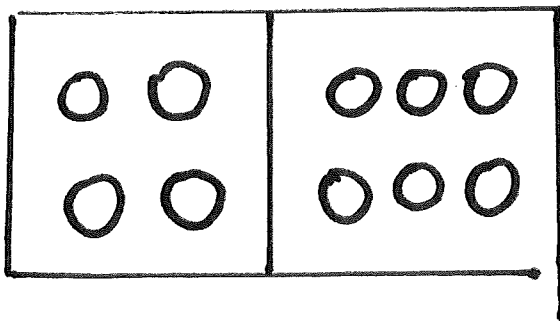
$$\begin{array}{r} 18 \\ + 1 \\ \hline \end{array}$$

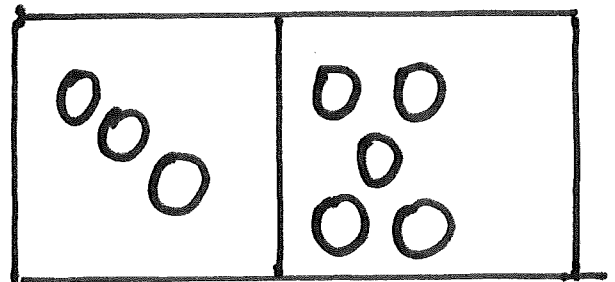
$$\begin{array}{r} 11 \\ + 6 \\ \hline \end{array}$$

$$\begin{array}{r} 12 \\ + 7 \\ \hline \end{array}$$

$$\begin{array}{r} 13 \\ + 3 \\ \hline \end{array}$$

$$\begin{array}{r} 15 \\ + 2 \\ \hline \end{array}$$





$$\begin{array}{r} 10 \\ \swarrow \quad \searrow \\ 0 \quad 10 \\ \hline \end{array}$$

$$\begin{array}{r} 10 \\ \swarrow \quad \searrow \\ \hline \end{array}$$
