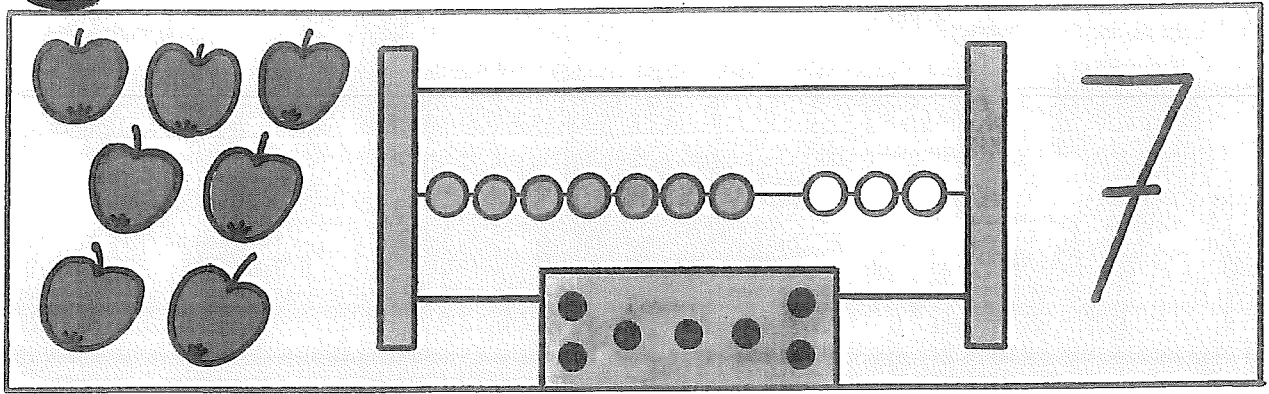
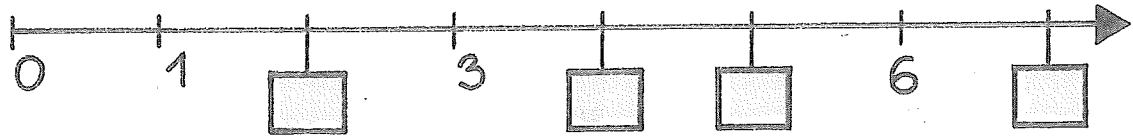


M


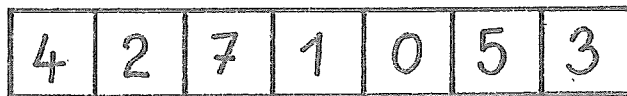

1. tř. DOBROVOLNÉ



1 Dopln čísla.



2 Které číslo z řady čísel od 0 do 7 chybí?



3 Porovnej a doplň $>$, $<$, $=$.

$7 \square 5$

$5 \square 4$

$7 \square 7$

$6 \square 3$

$7 \square 1$

$5 \square 5$

$3 \square 5$

$4 \square 7$

$7 \square 6$

$0 \square 1$

$3 \square 4$

$2 \square 3$

$5 \square 6$

$3 \square 7$

$6 \square 6$

$3 \square 3$

4 Dopiš čísla vagónů.

